



_____’s

Party Planning Guide



Congratulations!

You won \$300 (pretend money) to Plan a Birthday Party. Here are the rules for spending the money:

1. You can only use the money to purchase items from the list.
2. You may invite up to 15 people to the party. All costs listed are for 15 people. You cannot change the costs.
3. Any unused money will be lost, so spend as close to the total as possible.
4. You must choose **at least** one item from each group. (You must have at least one food, one drink, one decoration, and so on.)
5. Plan a party you and your friends would enjoy attending!
6. Have fun!





Location Options:

Location	Cost
Park	\$7.50
Gymnasium	\$25.00
Indoor Pool	\$95.00
Indoor Trampoline Park	\$92.75
Roller Skate Arena	\$37.50
Bowling Alley	\$48.00
Zoo	\$45.00

Decoration Options:

Decorations	Cost
Plain Balloons (don't float)	\$6.50
Helium Balloons	\$9.00
Streamers	\$8.50
Banners	\$5.00
Signs/Posters	\$6.00
Confetti	\$3.50
Lights	\$8.50



FOOD OPTIONS:

Food	Cost
Pizza	\$45.50
Chips	\$16.00
Hamburgers	\$42.50
Hotdogs	\$18.50
Vegetables and Dip	\$15.50
Cake	\$29.00
Brownies	\$12.50
Cookies	\$9.50

DRINK OPTIONS:

Drinks	Cost
Water Bottles	\$8.50
Pop (one kind)	\$12.25
Pop (three kinds)	\$15.10
Milk (white only)	\$6.75
Milk (white and chocolate)	\$10.50
Juice	\$11.75




Entertainment Options:


Entertainment	Cost
Photo Booth	\$85.50
Face Painting	\$39.50
Balloon Twisting	\$45.50
Live Music	\$65.00
Clown	\$55.50
Magician	\$72.00
Live Animal Handler	\$84.50

Gift Bag/Give Away Options:


Gift Bag/Give Aways	Cost
Candy	\$14.50
Glow Bracelets	\$12.50
Pencils	\$4.00
Erasers	\$2.50
Stickers	\$4.50
Pens	\$8.50
Gum	\$9.50




Work Mat: Show your neat and organized work here.



Work Mat: Show your neat and organized work here.



Work Mat: Show your neat and organized work here.



Work Mat: Show your neat and organized work here.

Your Perfect Party:

Calculate the total cost of your perfect party by adding the total from section.

Categories	Totals
Location	
Decorations	
Food	
Drinks	
Entertainment	
Gift Bags/Give Aways	

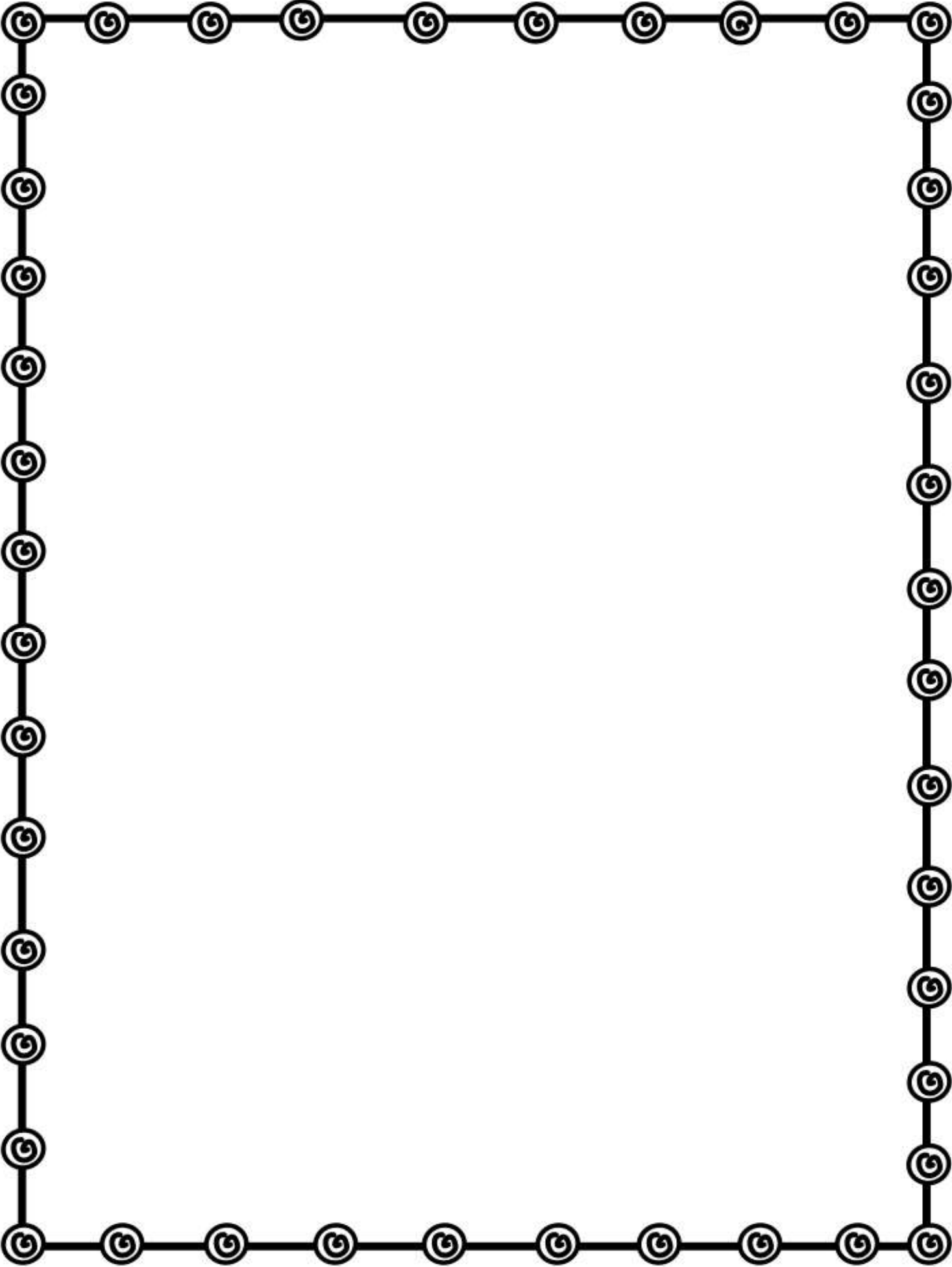
Grand Total of Ideal Perfect Party: _____

Your total budget was \$300. How much more money would you need to throw your perfect party? If your total was less than \$300, how much more money do you have to spend?

A decorative border consisting of a series of small circles connected by a thick black line, forming a rectangular frame around the page content.

Your Actual Party:

Look at your "perfect party" total. Make decisions to get your total cost as close to \$300 as possible. Use the next two pages to calculate possible changes. Turn the page to record you final sections.





Your Actual Party:

Look at the items listed on the previous page. What is the grand total of all items?

Grand Total of Actual Party: _____

Your total budget was \$300. How much money do you have left?

A decorative border consisting of a series of small circles connected by a thick black line, forming a rectangular frame around the page.

Your Actual Party:

What changes did you make from your “perfect party” plan to your “actual party” plan?

How did you decide which changes to make?



Party Problems:

1. How much would it cost to serve pizza, cake, and brownies at the party?
2. How much would it cost to put glow bracelets, candy, and pencils in the gift bags?
3. Gary has \$100 left to spend for his party. He orders chips and a face painter. How much money does he have left?



Party Problems:

4. How much would it cost to have a magician, a balloon twister, and a clown at the party?

5. Jordan has \$20. He bought confetti and lights. How much money does Jordan have left

6. Alexa has \$70 left to spend for her party. He orders brownies and milk. How much money does she have left?